

Section 1

Recombine these digits together to find what they make:

6 70 800

Section 2

$$300 + \square + 6 = 376$$

$$200 + \square + 3 = 283$$

Section 3

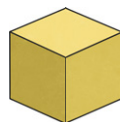
Complete the calculation:

$$65 - 39 = \square$$

Section 4

Match up the 3D shapes to their names:

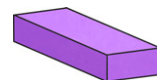
cube



cuboid



sphere



Section 6

4 tickets cost £24 altogether.

How much is one ticket?

Section 7

Convert these kilograms to grams.

$$\frac{1}{4} \text{ kg} = \square$$

$$1\frac{1}{4} \text{ kg} = \square$$



Section 5

$$15 \div 3 = \square$$

$$20 \div 10 = \square$$

$$12 \div 6 = \square$$

Section 8

Use the written formal method to answer:

$$83 \times 3 = \square$$

Year 3 Maths Activity Mat: 2

Answers

Section 1

Recombine these digits together to find what they make:

6 70 800

876

Section 2

$$300 + \boxed{70} + 6 = 376$$

$$200 + \boxed{80} + 3 = 283$$


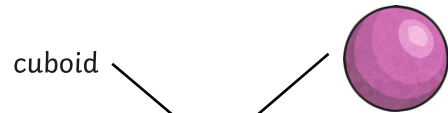

Section 3

Complete the calculation:

$$65 - 39 = \boxed{26}$$

Section 4

Match up the 3D shapes to their names:



Section 5

$$15 \div 3 = \boxed{5}$$

$$20 \div 10 = \boxed{2}$$

$$12 \div 6 = \boxed{2}$$

Section 6

4 tickets cost £24 altogether.

How much is one ticket?

£6

Section 7

Convert these kilograms to grams.

$$\frac{1}{4} \text{ kg} = \boxed{250\text{g}}$$

$$1\frac{1}{4} \text{ kg} = \boxed{1250\text{g}}$$



Section 8

Use the written formal method to answer:

$$83 \times 3 = \boxed{249}$$